



Determine the amount of money shown.

Answers

1)



1. \_\_\_\_\_

2. \_\_\_\_\_

3. \_\_\_\_\_

4. \_\_\_\_\_

5. \_\_\_\_\_

2)



3)



4)



5)





Determine the amount of money shown.



Answers

1. \$36.79



2. \$68.52

3. \$29.71



4. \$70.73

5. \$88.24







Determine the amount of money shown.

Answers



1. \_\_\_\_\_

2. \_\_\_\_\_

3. \_\_\_\_\_



4. \_\_\_\_\_

5. \_\_\_\_\_





Determine the amount of money shown.



Answers

1. \$45.47

2. \$44.72

3. \$43.08

4. \$95.52

5. \$32.22





Determine the amount of money shown.

Answers




1. \_\_\_\_\_

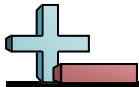
2. \_\_\_\_\_

3. \_\_\_\_\_

4. \_\_\_\_\_

5. \_\_\_\_\_





Determine the amount of money shown.



Answers

1. \$85.52

2. \$78.59

3. \$56.21

4. \$81.97

5. \$52.35





Determine the amount of money shown.

Answers




1. \_\_\_\_\_

2. \_\_\_\_\_

3. \_\_\_\_\_


4. \_\_\_\_\_

5. \_\_\_\_\_





Determine the amount of money shown.



Answers

1. \$92.83

2. \$99.36

3. \$56.28

4. \$91.52

5. \$47.07





Determine the amount of money shown.

Answers



1. \_\_\_\_\_

2. \_\_\_\_\_

3. \_\_\_\_\_

4. \_\_\_\_\_

5. \_\_\_\_\_





Determine the amount of money shown.



Answers

1. \$52.37

2. \$28.97

3. \$31.82

4. \$92.64

5. \$60.68





Determine the amount of money shown.

Answers



1. \_\_\_\_\_

2. \_\_\_\_\_

3. \_\_\_\_\_

4. \_\_\_\_\_

5. \_\_\_\_\_





Determine the amount of money shown.



Answers

1. \$84.57

2. \$32.03

3. \$38.13

4. \$40.58

5. \$50.98







Determine the amount of money shown.

Answers



1. \_\_\_\_\_

2. \_\_\_\_\_

3. \_\_\_\_\_



4. \_\_\_\_\_

5. \_\_\_\_\_





Determine the amount of money shown.



Answers

1. \$23.57

2. \$87.55

3. \$26.12

4. \$64.11

5. \$75.49







Determine the amount of money shown.

Answers



1. \_\_\_\_\_

2. \_\_\_\_\_

3. \_\_\_\_\_

4. \_\_\_\_\_

5. \_\_\_\_\_





Determine the amount of money shown.



Answers

1. \$27.34

2. \$14.43

3. \$37.33

4. \$80.62

5. \$80.12





Determine the amount of money shown.

Answers



1. \_\_\_\_\_

2. \_\_\_\_\_

3. \_\_\_\_\_

4. \_\_\_\_\_

5. \_\_\_\_\_





Determine the amount of money shown.



Answers

1. \$23.39

2. \$42.97

3. \$87.88

4. \$68.82

5. \$80.67





Determine the amount of money shown.

Answers



1. \_\_\_\_\_

2. \_\_\_\_\_

3. \_\_\_\_\_

4. \_\_\_\_\_

5. \_\_\_\_\_





Determine the amount of money shown.



Answers

1. \$80.72

2. \$76.10

3. \$37.81

4. \$60.02

5. \$46.37